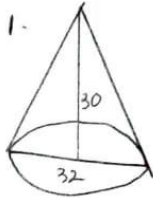
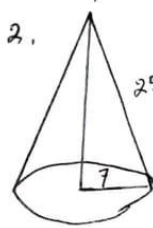


**SOAL MATEMATIKA**  
**(REVIEW KE-4 BANGUN RUANG)**

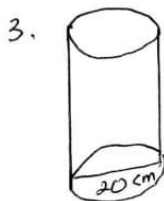
6



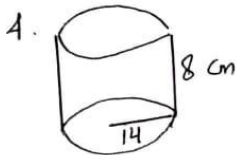
- a)  $V$   
b)  $L$  selimut  
c)  $L$  permukaan.



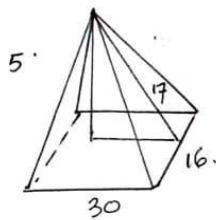
- a)  $V$   
b)  $L$  selimut  
c)  $L$ uar permukaan



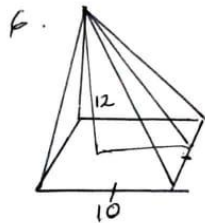
- a)  $V$   
b)  $L$  selimut  
c)  $L$ uar permukaan



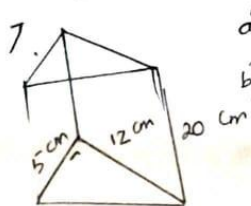
- a)  $V$   
b)  $L$  selimut  
c)  $lp$



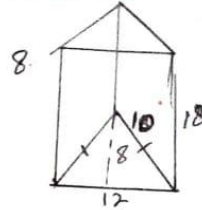
- a)  $V$   
b)  $lp$



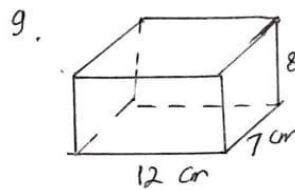
- a)  $V$   
b)  $lp$



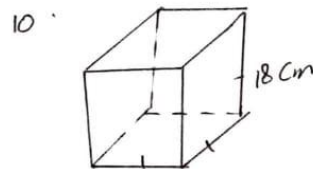
- a)  $V$   
b)  $lp$



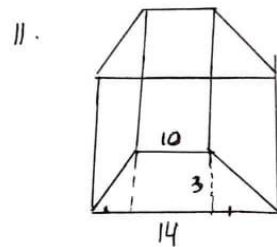
- a)  $V$   
b)  $lp$ .



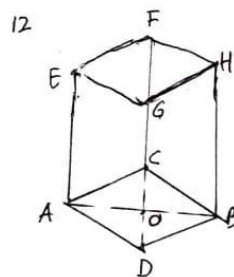
- $V =$   
 $lp =$



- $V =$   
 $lp =$



- $V =$   
 $lp$



- $AB = 16$  cm  
 $CD = 12$  cm  
 $HB = 20$  cm  
 $V =$   
 $lp =$

